

Thursday 21st January

L.O. I can subtract by counting back

Challenge A - can you complete these sums using the number tracks?

a) $14 - 3 =$

1	2	3	4	5	6	7	8	9	10	11	12	13	14	15
---	---	---	---	---	---	---	---	---	----	----	----	----	----	----

b) $15 - 4 =$

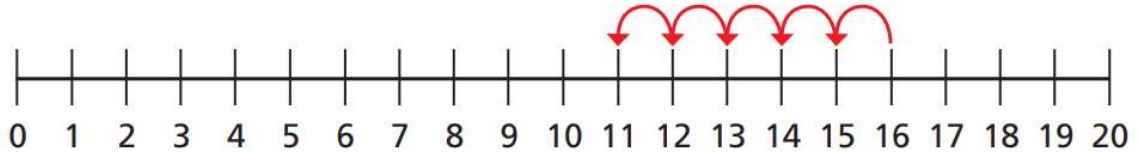
1	2	3	4	5	6	7	8	9	10	11	12	13	14	15
---	---	---	---	---	---	---	---	---	----	----	----	----	----	----

c) $14 - 4 =$

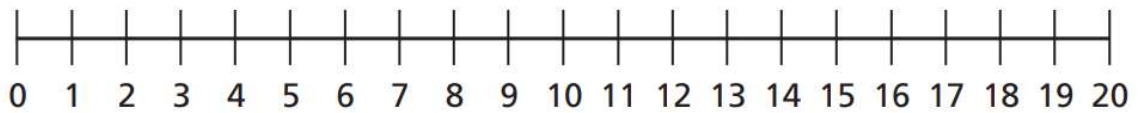
1	2	3	4	5	6	7	8	9	10	11	12	13	14	15
---	---	---	---	---	---	---	---	---	----	----	----	----	----	----

Challenge B - can you complete these sums using the number line?

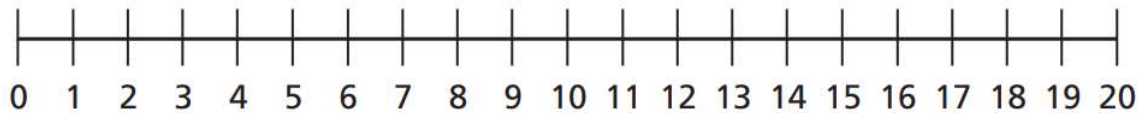
a) $16 - 5 =$



b) $18 - 4 =$

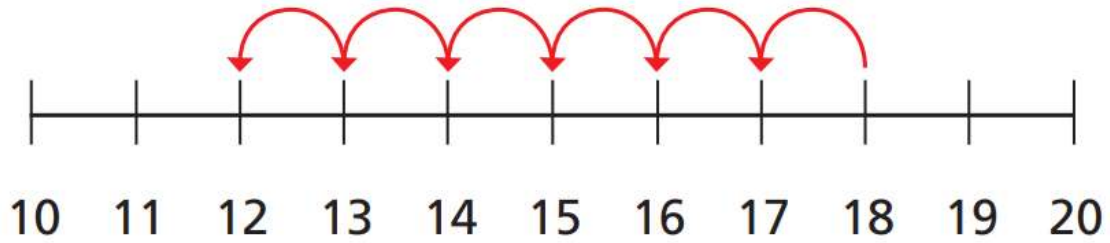


c) $19 - 5 =$



Challenge C -

Sam uses a number line to do a subtraction.



Complete Sam's subtraction.

$$\square - \square = \square$$