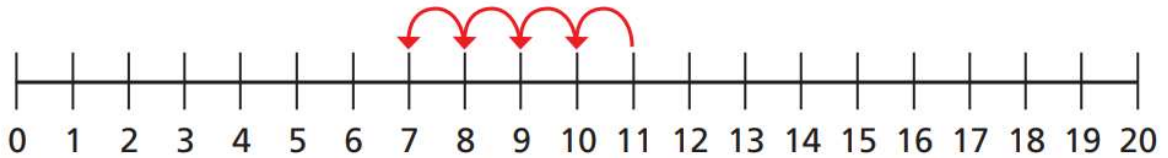
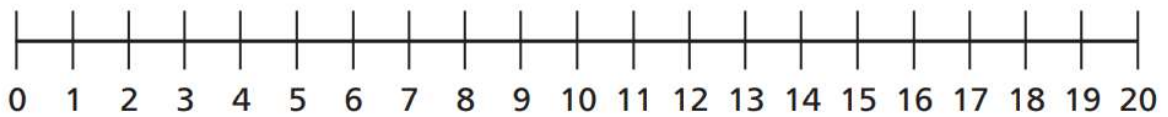


Challenge B - Use the number lines to help you.

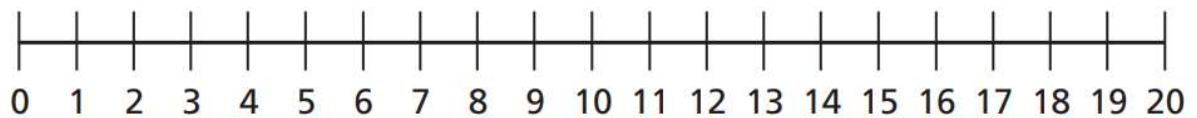
a) $11 - 4 =$



b) $16 - 9 =$



c) $14 - 11 =$

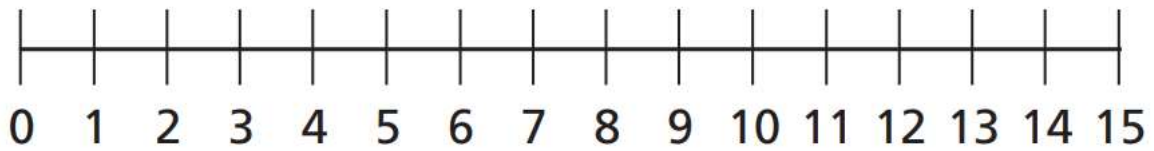


There are 13 toys in a box.

Kim takes some toys out of the box.

There are 5 toys left in the box.

How many toys does Kim take out of the box?



Kim takes

toys out of the box.