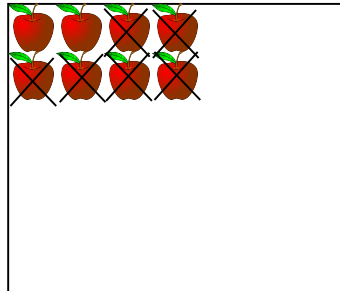



Wednesday 20th January.

L.O. I can count backwards.

Challenge A

There were 8 apples on a plate, but Jane ate 6 of them.



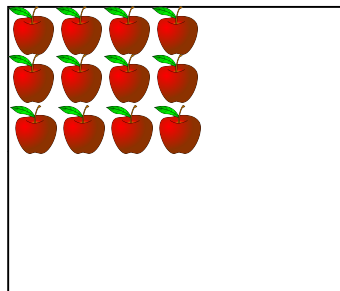

First there were _____ apples.

Then _____ were eaten.

Now there are _____ apples.

$$\underline{\quad} - \underline{\quad} =$$

There were 16 apples on a plate, but Sophie ate 5 of them.



First there were _____ apples.

Then _____ were eaten.

Now there are _____ apples.




$$\underline{\quad} - \underline{\quad} =$$

Wednesday 20th January.

L.O. I can count backwards.

Challenge A

There were 28 apples on a plate, but Ryan ate 6 of them.




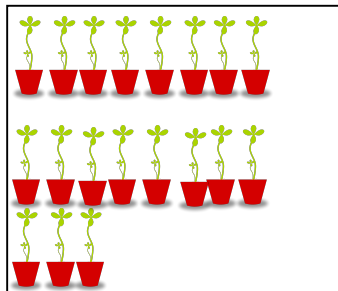

First there were _____ apples.

Then _____ were eaten.

Now there are _____ apples.

$$\underline{\quad} - \underline{\quad} =$$

There were 19 plants growing in the classroom. 8 of them were moved outside.



First there were _____ plants.

Then _____ went outside.

Now there are _____ plants.